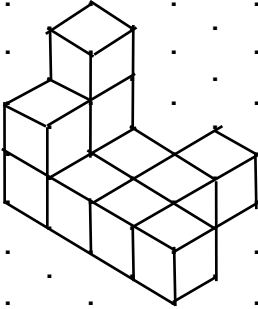
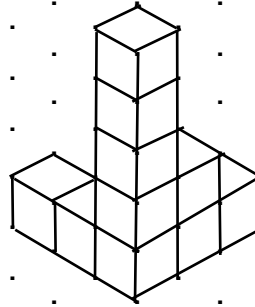


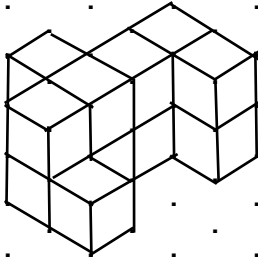
A



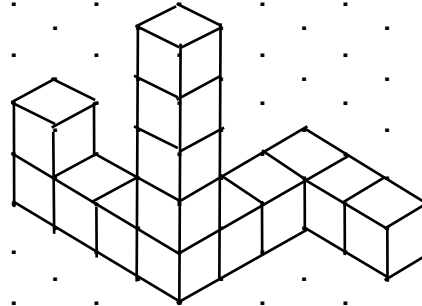
B



C



D



Remplis ce tableau, en prenant bien soin d'indiquer les bonnes unités de mesure correspondantes.

	A	B	C	D
Volume :				
Périmètre de la base :				
La hauteur :				
Aire du dessus :				
Aire latérale :				